

Maths In & Out

Write the number that comes out when you use the number in the circle

+ 2	in	2	7	6	1	5	8	0	3
	out								

+ 3	in	5	9	1	0	3	8	2	4
	out								

- 1	in	7	4	2	8	3	5	9	1
	out								

- 2	in	10	6	3	9	4	2	7	5
	out								

+ 1	in	9	12	16	19	17	25	43	98
	out								

+ 10	in	4	1	2	9	3	8	5	7
	out								

Maths In & Out

Write the number that comes out when you use the number in the circle

+ 5	in	3	8	1	7	2	9	0	4
	out								

+4	in	1	3	6	2	8	0	5	4
	out								

-0	in	7	4	2	8	3	5	9	1
	out								

-2	in	13	19	15	11	17	10	2	18
	out								

+1	in	28	47	36	19	79	53	99	65
	out								

+10	in	23	15	37	90	48	81	54	72
	out								

Maths In & Out

Write the number that comes out when you use the number in the circle

+ 2	in	2	7	6	1	5	8	0	3
	out								

+ 3	in	5	9	1	0	3	8	2	4
	out								

- 1	in	7	4	2	8	3	5	9	1
	out								

- 2	in	10	6	3	9	4	2	7	5
	out								

+ 1	in	9	12	16	19	17	25	43	98
	out								

+ 10	in	4	1	2	9	3	8	5	7
	out								

Maths In & Out

Write the number that comes out when you use the number in the circle

+100	in	20	8	1	99	72	36	22	500
	out								

-5	in	60	25	30	45	70	15	90	85
	out								

x2	in	2	8	3	9	7	4	6	1
	out								

-10	in	59	26	33	71	84	11	45	62
	out								


+4	in	92	84	61	59	28	37	45	77
	out								


x3	in	4	9	6	3	8	2	10	5
	out								


Maths In & Out


Write the number that comes out when you use the number in the circle


	in								
	out								

	in								
	out								

	in								
	out								

	in								
	out								

	in								
	out								

	in								
	out								